
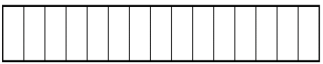



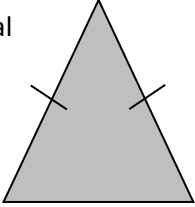


Name: _____

Date: _____

Class/Group: _____

A: Place Value, Add and Subtract		B: Multiply, Divide and Fractions		C: Measure and Problem Solving	
1. What is the missing number? 18 <input type="text"/> 36 45 54	4:1 27	11. $42 \div 6 =$	4:9 7	21. How many metres (m) are in 3.5 kilometres (km)?	4:19 3,500
2. What is the missing number? 49 56 63 <input type="text"/> 77	4:1 70	12. Two factors of 28 add up to 9. What are they?	4:10 2,7		
3. What is 1,000 more than 150?	4:2 1,150	13. $234 \times 5 =$	4:11 1,170	22. The sides of a rectangle are 2m and 6m. What is the perimeter of the rectangle? 	4:19 16m
4. Round this number to the nearest 10: 1,543	4:2 1,540	14. In a class of 18 there are 2 girls for every 1 boy. How many girls are there?	4:12 12		
5. What is $3 - 5$?	4:3 -2	15. $\frac{1}{3} = \frac{?}{15}$ 	4:13 5	23. About how much is in this 1 litre jug? Write a, b or c.  a. about 250ml b. about 550ml c. about 750ml	4:20 b
6. What is the value of the 2 in this number? 2,789	4:4 2,000	16. What is the missing number? 1.72 1.73 1.74 <input type="text"/> 1.76	4:14 1.75		
7. Write the number 22 in Roman numerals.	4:5 XXII	17. $\frac{3}{13} + \frac{6}{13}$	4:15 $\frac{9}{13}$	24. How would 2 pm be shown on a 24 hour digital clock? 	4:21 14:00
8. $4,528 - 216 =$	4:6 4,312	18. Write $\frac{1}{4}$ as a decimal number.	4:16 0.25		
9. Write the sum to check $239 + 154 = 393$: $393 - \square = \square$	4:7 154, 239 	19. $23 \div 100 =$	4:17 0.23	25. What is the special name for this type of triangle? 	4:22 Isos-celes
10. I have £1. I spend 34p then 45p. How much do I have left?	4:8 21p	20. Round 3.4 to the nearest whole number.	4:18 3		
Total (A)		Total (B)		Total (C)	
Test Total (A+B+C)		R (0-9)	Y (10-19)	G (20-25)	