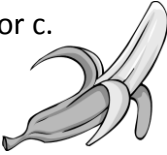





Name: _____

Date: _____

Class/Group: _____

| A: Place Value, Add and Subtract | | B: Multiply, Divide and Fractions | | C: Measure and Geometry | |
|--|------|--|-----------|---|------|
| 1. What is the missing number? 0 2 4 6 <input type="text"/> 10 12 | 2:1 | 11. $35 \div 5 =$ | 2:11 | 21. Estimate the weight of a banana. Write a, b or c. a. about 15g b. about 150g c. about 15kg | 2:17 |
| 2. What is the value of the 4 in this number? 49 | 2:2 | 12. Which are the odd numbers? 3 6 9 12 | 2:11 |  | |
| 3. What number is labelled?  | 2:3 | 13. What symbol is missing? $4 \square 6 = 24$ | 2:12 | 22. How many ten pence (10p) coins are the same value as a fifty pence (50p) coin?  | 2:19 |
| 4. Which numbers are > 15 ? 12 14 16 18 | 2:4 | 14. What symbol is missing? $30 \div 6 \square 5$ | 2:12 | | |
| 5. Write this number in numerals. fifty three | 2:5 | 15. Is this true? Write 'yes' or 'no'. $10 \div 5 = 5 \div 10$ | 2:13 | 23. Katie has sixty pence (60p). She spends forty-five pence (45p). How much money does she have left? | 2:20 |
| 6. There are 30 children in a class. 12 are girls. How many are boys? | 2:6 | 16. 4 children share 32 sweets. How many sweets does each child get? | 2:14 | | |
| 7. $20 - 7 =$ | 2:7 | 17. 4 teams enter a 7-a-side contest. How many players are in the contest? | 2:14 | 24. Which is longest? Write a, b, or c. a. an hour b. 80 minutes c. quarter of an hour | 2:21 |
| 8. $58 - 10 =$ | 2:8 | 18. Write the fraction one half in numerals. | 2:15 | | |
| 9. Is this true? Write 'yes' or 'no'. $17 + 18 = 18 + 17$ | 2:9 | 19. How many quarters are in 2 whole ones? | 2:15 | 25. Draw the hands to show Quarter to four.  | 2:22 |
| 10. Use $65 + 18 = 83$ to help find: $83 - 18 = \square$ | 2:10 | 20. What is $\frac{1}{2}$ of 14 ? | 2:16 | | |
| Total (A) | | Total (B) | | Total (C) | |
| Test Total (A+B+C) | | R (0-9) | Y (10-19) | G (20-25) | |