




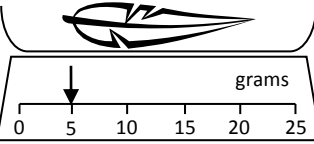
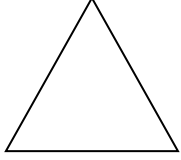

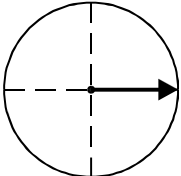


Name: _____

Date: _____

Class/Group: _____

A: Number and Place Value		B: Fractions and Measure		C: Measure and Geometry	
1. What is the missing number? 23 24 25 26 <input type="text"/>	1:1	11. Circle half ($\frac{1}{2}$) of the balls. 	1:11	16. Which comes first in the day? a. tea b. lunch c. breakfast 	1:16
2. What is the missing number? 5 10 <input type="text"/> 20 25	1:2				
3. What number is one more than 38?	1:3	12. Circle a quarter ($\frac{1}{4}$) of the sweets. 	1:12	17. How many days are in a week? a. 4 b. 7 c. 12	1:17
4. Pat has 3 sweets. Sam has 5. Who has the most ?	1:4				
5. Write this number in numerals: twelve	1:5	13. Circle the full glass. 	1:13	18. Draw the hands to show: 2 o'clock 	1:18
6. What symbol is missing? 5 <input type="text"/> 4 = 9	1:6				
7. What is the missing number? 10 = 3 + <input type="text"/>	1:7	14. How heavy is the feather? 	1:14	19. What is this shape? a. square b. triangle c. circle 	1:19
8. 14 + 5 =	1:8				
9. What is the missing number? 20 = <input type="text"/> + 9	1:9	15. How much altogether? 	1:15	20. The arrow points: a. up b. left c. right 	1:20
10. 4 children each have 2 pens. How many pens do they have altogether?	1:10				
Total (A)		Total (B)		Total (C)	
Test Total (A+B+C)		R (0-7)	Y (8-15)	G (16-20)	