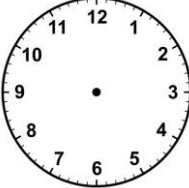
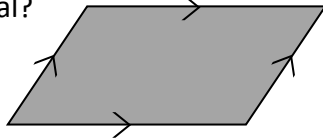
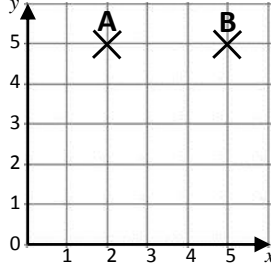


Name: _____

Date: _____

Class/Group: _____

A: Place Value, Add and Subtract		B: Multiply, Divide and Fractions		C: Measure and Geometry	
1. What is the missing number? 50 75 100 <input type="text"/> 150	4:1	11. $84 \div 12 =$	4:9	21. Which of these is the best estimate for the weight of a packet of crisps? a. 2 grams b. 20 grams c. 200 grams	4:21
2. What is the missing number? 54 <input type="text"/> 72 81 90	4:1	12. Use $3 \times 7 \times 11 = 231$ to answer: 21×11	4:10		4:22
3. What is 1,000 less than 2,934?	4:2	13. $64 \times 8 =$	4:11	22. Draw the hands to show: <div style="border: 1px solid black; padding: 2px; display: inline-block;">19:05</div> 	4:22
4. Round this number to the nearest 1,000: 3,275	4:2	14. Shop A sells 6 pens for £3.60. Shop B sells 2 pens for £1. Which is cheaper?	4:12		4:23
5. Put these numbers in order, smallest first: -1 -5 -3	4:3	15. $\frac{1}{3} = \frac{\square}{6} = \frac{3}{\square}$	4:13	23. What is the name of this quadrilateral? 	4:23
6. Put these in order, smallest first: 2,395 2,593 2,359	4:4	16. I have $\frac{1}{100}$ of a cake. How many hundredths do I need to make $\frac{1}{10}$?	4:14		4:28
7. What number does this Roman Numeral represent? LXXV	4:5	17. $\frac{9}{5} - \frac{2}{5}$	4:15	24. Plot the point (5, 2). Label it C. 	4:28
8. $3,473 - 1,230 =$	4:6	18. Write $\frac{36}{100}$ as a decimal number.	4:16		4:28
9. Write the sum to check $392 - 98 = 294$: $98 + \square = \square$	4:7	19. What is the value of the 1 in: 3.91	4:17		4:28
10. Pencils weigh 55g. Pens weigh 73g. How heavy are 2 pencils and 1 pen?	4:8	20. Round 3.6 to the nearest whole number.	4:18	25. Points A, B and C form 3 corners of a square. Plot the fourth corner of the square and label it D.	4:28
Total (A)		Total (B)		Total (C)	
Test Total (A+B+C)		R (0-9)	Y (10-19)	G (20-25)	