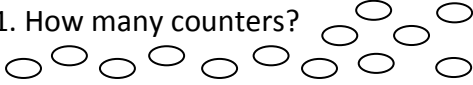
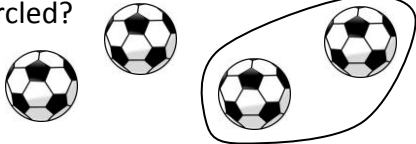
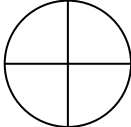





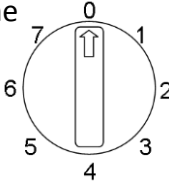


Name: _____

Date: _____

Class/Group: _____

A: Number and Place Value		B: Fractions and Measure		C: Measure and Geometry	
1. How many counters? 	1:1	11. What fraction of the balls is circled? 	1:11	16. If today is Monday, tomorrow is: a. Sunday b. Tuesday c. Friday	1:16
2. What is the missing number? 10 20 <input type="text"/> 40 50	1:2				
3. What number is one more than 49?	1:3	12. Colour in $\frac{1}{4}$ of this shape. 	1:12	17. How many months are in a year? a. 7 b. 12 c. 52	1:17
4. Write a number that is less than 8.	1:4				
5. Write this number in numerals: nineteen	1:5	13. Which pan has the lighter weight in it? 	1:13	18. Draw the hands to show: Half past nine. 	1:18
6. What symbol is missing? 7 <input type="text"/> 3 + 4	1:6				
7. What is the missing number? 13 + <input type="text"/> = 20	1:7	14. How much water is in the bowl? 	1:14	19. What is this shape? a. square b. triangle c. circle 	1:19
8. 9 + 18 =	1:8				
9. Mike has 12 sweets. He eats 8 of them. How many does he have left?	1:9	15. How much altogether? 	1:15	20. What number will the dial be pointing to after being turned through half a turn? 	1:20
10. 2 cakes come in a box. If you buy 5 boxes, how many cakes do you have?	1:10				
Total (A)		Total (B)		Total (C)	
Test Total (A+B+C)		R (0-7)	Y (8-15)	G (16-20)	