
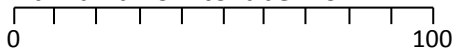

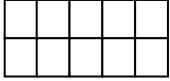
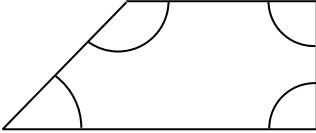
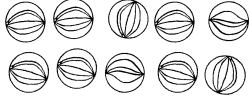
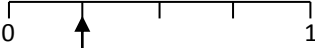

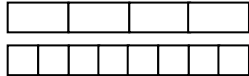


Name: \_\_\_\_\_

Date: \_\_\_\_\_

Class/Group: \_\_\_\_\_

A: Place Value, Add and Subtract		B: Multiply, Divide and Fractions		C: Measure, Geometry and Statistics	
1. What is the missing number? 0 8 16 24 <input type="text"/>	3:1	11. $27 \div 3 =$	3:10	23. About how long is a kids' cartoon show? <b>a.</b> 15 minutes <b>b.</b> 50 minutes <b>c.</b> 1 hour	3:23
2. What is the <b>7</b> worth in this number? 712	3:2	12. $9 \times 4 =$	3:10		
3. Put these in order, smallest first. 241 412 421 142	3:3	13. Use $7 \times 8 = 56$ to solve: $560 \div 8 =$	3:11	22. Tick the shape which is a face of a cylinder.	3:25
4. Draw an arrow to label 70. 	3:4	14. Eggs come in boxes of 6. I need 27 eggs. How many boxes should I buy?	3:12		
5. Circle all the <b>multiples</b> of 4. 6 8 14 16 22	3:5	15. Shade $\frac{1}{10}$ of this shape? 	3:13	23. How many right angles are in this shape? 	3:26
6. $612 + 100 =$	3:6	16. Circle $\frac{3}{5}$ of the marbles. 	3:14		
7. $682 + 176 =$	3:7	17. What fraction is labelled? 	3:15	24. Favourite football teams: 	3:29
8. Write a sum to check $54 + 18 = 72$ . Check: $72 - \square = \square$	3:8	18. $\frac{2}{8} = \frac{?}{4}$ 	3:16	9 people said 'Man City'. Show this.	
9. To a no. I add 13 then subtract 29. I now have 3. What did I start with?	3:9	19. Subtract the fractions. $\frac{5}{7} - \frac{2}{7}$	3:17	25. How many more people said 'Man Utd' than said 'Chelsea'?	3:30
10. What is the missing number? $212 + \square = 307$	3:9	20. Write the largest fraction. $\frac{1}{8} \quad \frac{3}{8} \quad \frac{2}{8} \quad \frac{5}{8}$	3:18		
Total (A)		Total (B)		Total (C)	
Test Total (A+B+C)		R (0-9)		Y (10-19)	
				G (20-25)	