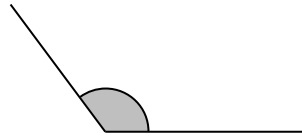

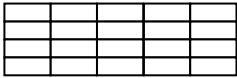
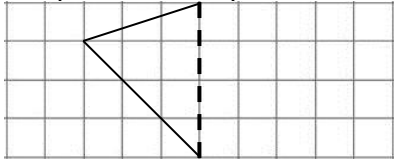
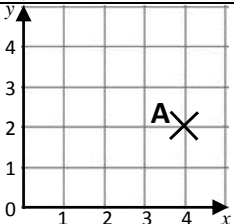


Name: \_\_\_\_\_

Date: \_\_\_\_\_

Class/Group: \_\_\_\_\_

A: Place Value, Add and Subtract		B: Multiply, Divide and Fractions		C: Measure and Geometry	
1. What is the missing number? 14 <input type="text"/> 28 35 42	4:1	11. $7 \times 12 =$	4:9	21. Harry is 9 years and 5 months old. Zac is 14 months older. How old is Zac?	4:19
2. What is the missing number? 36 42 48 <input type="text"/> 60	4:1	12. Complete the sum that is equal to $24 \times 11: 2 \times \text{} \times 11$	4:10		4:24
3. Round this number to the nearest 10: 2,167	4:2	13. $95 \times 8 =$	4:11		
4. Round this number to the nearest 100: 1,543	4:2	14. One wooden block is 6cm tall. If 12 blocks are piled up, how tall are they?	4:12	23. How many lines of symmetry does this rectangle have? 	4:25
5. What is the next number in this sequence: 4, 3, 2, 1, 0, <input type="text"/>	4:3	15. $\frac{1}{5} = \frac{?}{20}$ 	4:13		
6. Write < or > to make this correct: 1,782 <input type="text"/> 2,817	4:4	16. To share a number into hundredths you divide it by <input type="text"/> .	4:14		
7. What number does this Roman Numeral represent? <b>LX</b>	4:5	17. $\frac{12}{9} - \frac{7}{9}$	4:15	24. Complete this shape: 	4:26
8. $2,725 + 834 =$	4:6	18. Write $\frac{1}{10}$ as a decimal number.	4:16		
9. <b>Estimate</b> the answer to: $6,504 - 4,478$	4:7	19. What is the <b>value</b> of the 7 in: 1.72	4:17	25. What are the co-ordinates of the point labelled A? 	4:27
10. A pet mouse weighed 65g. Its weight doubled. How heavy is it now?	4:8	20. Put these heights in order, smallest first: 1.4m 1.18m 1.22m	4:18		
Total (A)		Total (B)		Total (C)	
Test Total (A+B+C)		R (0-9)	Y (10-19)	G (20-25)	