
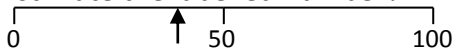
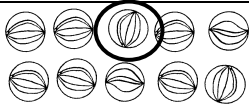
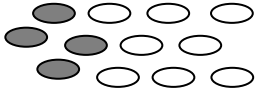
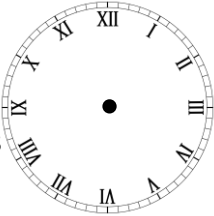

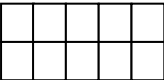



Name: _____

Date: _____

Class/Group: _____

A: Place Value, Add and Subtract		B: Multiply, Divide and Fractions		C: Measure and Geometry	
1. What is the missing number? 0 50 <input type="text"/> 150 200 250	3:1	11. $72 \div 8 =$	3:10	23. One cup holds 330 millilitres of liquid. How much do 3 cups hold?	3:19
2. What is the 3 worth in this number? 513	3:2	12. $12 \times 8 =$	3:10		
3. Write this number in words. 720	3:3	13. $34 \times 4 =$	3:11	22. Tom bought 4 cans of pop that were 60p each. How much did they cost in total? Give your answer in pounds and pence.	3:21
4. Estimate the labelled number? 	3:4	14. I buy 6 packs of balloons. I have 30 balloons. How many are in each pack?	3:12		
5. Write a number that is smaller than 648 using the same three digits.	3:5	16. What fraction is circled? 	3:13	23. Draw hands on the clock to show Twenty five minutes to four.	3:22
6. $392 + 10 =$	3:6	16. What fraction is shaded? 	3:14		
7. $528 - 64 =$	3:7	17. What is $\frac{1}{3}$ of 18?	3:15	24. How many right angles make half a turn? 	3:27
8. Circle the best estimate to $79 + 101$ 170 180 190 200	3:8	18. This shape is in tenths. Shade in $\frac{2}{5}$. 	3:16		
9. Use $18 + 34 = 52$ to help solve: $520 - 180 =$ <input type="text"/>	3:9	19. Add the fractions. $\frac{3}{9} + \frac{5}{9}$	3:17	25. Circle the vertical line. 	3:28
10. What is the missing number? $148 -$ <input type="text"/> $= 89$	3:9	20. Write the smallest fraction. $\frac{1}{3}$ $\frac{1}{6}$ $\frac{1}{7}$ $\frac{1}{2}$	3:18		
Total (A)		Total (B)		Total (C)	
Test Total (A+B+C)		R (0-9)	Y (10-19)	G (20-25)	