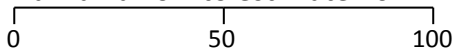
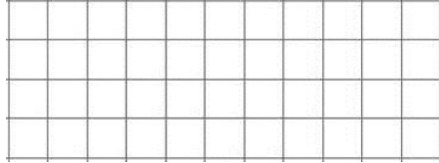
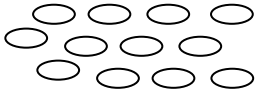










Name: _____

Date: _____

Class/Group: _____

A: Place Value, Add and Subtract		B: Multiply, Divide and Fractions		C: Measure, Geometry and Statistics							
1. What is the missing number? 0 100 200 300 400 <input type="text"/>	3:1	11. $36 \div 4 =$	3:10	23. David says the time is "8 o'clock in the morning". Which of these means the same thing? a. 8 noon b. 8 am c. 8 pm	3:23						
2. What is the 8 worth in this number? 847	3:2	12. $4 \times 3 =$	3:10	22. How many days are in a year? a. 52 b. 365 c. 366	3:24						
3. Put these in order, largest first. 847 478 874 784	3:3	13. Use $24 \div 8 = 3$ to solve: $240 \div 8 =$	3:11								
4. Draw an arrow to estimate 70. 	3:4	14. What is the missing number? $80 \div \square = 2 \times 4$	3:12	23. On the grid draw a hexagon. 	3:25						
5. Tom counts up in 100s starting from 300. What will his 4 th number be?	3:5	15. What is the missing fraction? $\frac{5}{10}$, $\frac{6}{10}$, <input type="text"/>	3:13								
6. $714 - 100 =$	3:6	16. Shade $\frac{1}{4}$ of the counters. 	3:14	24. No. of tyres sold one weekend: <table border="1" data-bbox="1480 1027 1973 1190"> <tr> <td colspan="2">Key:  means 4 tyres</td> </tr> <tr> <td>Saturday</td> <td></td> </tr> <tr> <td>Sunday</td> <td><input type="text"/></td> </tr> </table>	Key:  means 4 tyres		Saturday		Sunday	<input type="text"/>	3:29
Key:  means 4 tyres											
Saturday											
Sunday	<input type="text"/>										
7. $293 + 49 =$	3:7	17. What fraction is labelled? 	3:15								
8. Write a sum to check $89 - 65 = 24$. Check: 24 <input type="text"/> 65 <input type="text"/> 89	3:9	18. This shape is in sixths. <input type="text"/> Shade in $\frac{1}{3}$. 	3:16	13 tyres were sold on Sunday. Show this. 25. How many tyres were sold on Saturday?	3:30						
9. After spending 56p, Sue still has 44p left. How much did she start with?	3:8	19. Subtract the fractions. $\frac{4}{11} - \frac{2}{11}$	3:17								
10. What is the missing number? <input type="text"/> + 412 = 724	3:9	20. Write the smallest fraction. $\frac{2}{8}$ $\frac{7}{8}$ $\frac{3}{8}$ $\frac{5}{8}$	3:18								
Total (A)		Total (B)		Total (C)							
Test Total (A+B+C)		R (0-9)	Y (10-19)	G (20-25)							