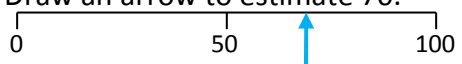
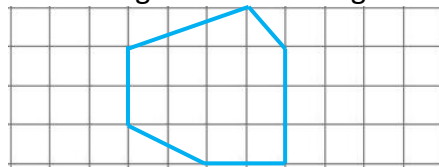
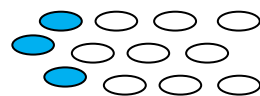
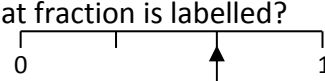









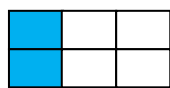


Name: _____

Date: _____

Class/Group: _____

A: Place Value, Add and Subtract		B: Multiply, Divide and Fractions		C: Measure, Geometry and Statistics							
1. What is the missing number? 0 100 200 300 400 <input type="text"/>	^{3:1} 500	11. $36 \div 4 =$	^{3:10} 9	23. David says the time is "8 o'clock in the morning". Which of these means the same thing? a. 8 noon b. 8 am c. 8 pm	^{3:23} b						
2. What is the 8 worth in this number? 847	^{3:2} 800 (hundreds)	12. $4 \times 3 =$	^{3:10} 12								
3. Put these in order, largest first. 847 478 874 784	^{3:3} 874, 847, 784, 478	13. Use $24 \div 8 = 3$ to solve: $240 \div 8 =$	^{3:11} 30	22. How many days are in a year? a. 52 b. 365 c. 366	^{3:24} b						
4. Draw an arrow to estimate 70. 	^{3:4} Arrow	14. What is the missing number? $80 \div \square = 2 \times 4$	^{3:12} 10								
5. Tom counts up in 100s starting from 300. What will his 4 th number be?	^{3:5} 600	15. What is the missing fraction? $\frac{5}{10}, \frac{6}{10}, \square$	^{3:13} $\frac{7}{10}$	23. On the grid draw a hexagon. 	^{3:25} Any 6 sided shape						
6. $714 - 100 =$	^{3:6} 614	16. Shade $\frac{1}{4}$ of the counters. 	^{3:14} 3								
7. $293 + 49 =$	^{3:7} 342	17. What fraction is labelled? 	^{3:15} $\frac{2}{3}$	24. No. of tyres sold one weekend: <table border="1" data-bbox="1478 1029 1971 1197"> <tr> <td colspan="2">Key:  means 4 tyres</td> </tr> <tr> <td>Saturday</td> <td></td> </tr> <tr> <td>Sunday</td> <td></td> </tr> </table>	Key:  means 4 tyres		Saturday		Sunday		^{3:29} 12 and a quarter circles
Key:  means 4 tyres											
Saturday											
Sunday											
8. Write a sum to check $89 - 65 = 24$. Check: $24 \square + 65 \square = 89$	^{3:9} +, =	18. This shape is in sixths.  Shade in $\frac{1}{3}$.	^{3:16} 2	13 tyres were sold on Sunday. Show this.							
9. After spending 56p, Sue still has 44p left. How much did she start with?	^{3:8} £1	19. Subtract the fractions. $\frac{4}{11} - \frac{2}{11}$	^{3:17} $\frac{2}{11}$	25. How many tyres were sold on Saturday?	^{3:30} 19						
10. What is the missing number? $\square + 412 = 724$	^{3:9} 312	20. Write the smallest fraction. $\frac{2}{8}, \frac{7}{8}, \frac{3}{8}, \frac{5}{8}$	^{3:18} $\frac{2}{8}$								
Total (A)		Total (B)		Total (C)							
Test Total (A+B+C)		R (0-9)	Y (10-19)	G (20-25)							