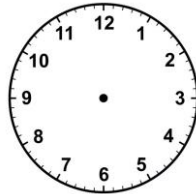
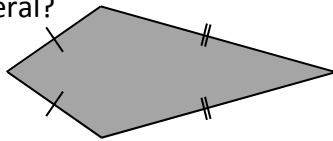
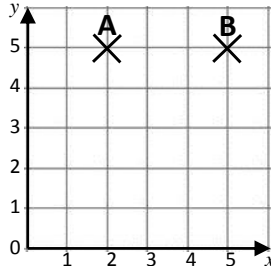


Name: _____

Date: _____

Class/Group: _____

A: Place Value, Add and Subtract		B: Multiply, Divide and Fractions		C: Measure and Geometry	
1. What is the missing number? 50 75 <input type="text"/> 125 150	4:1	11. $144 \div 12 =$	4:9	21. Kirsty has 1 kilogram of sugar. She uses 650 grams to make some cakes. How many grams of sugar are left?	4:21
2. What is the missing number? 54 63 72 81 <input type="text"/>	4:1	12. Use $7 \times 13 \times 2 = 182$ to answer: 14×13	4:10		
3. What is 1,000 less than 7,345?	4:2	13. $57 \times 5 =$	4:11	22. Draw the hands to show: <div>21:40</div> 	4:22
4. Round this number to the nearest 1,000: 7,548	4:2	14. Shop A sells 8 pens for £4. Shop B sells 3 pens for £2. Which is cheaper?	4:12		
5. Put these numbers in order, smallest first: -4 0 -2	4:3	15. $\frac{1}{5} = \frac{\text{ }}{15} = \frac{5}{\text{ }}$	4:13	23. What is the name of this quadrilateral? 	4:23
6. Put these in order, smallest first: 4,384 4,843 4,438	4:4	16. To find $\frac{1}{10}$ of a number, what do you divide it by?	4:14		
7. What number does this Roman Numeral represent? XXXIX	4:5	17. $\frac{13}{5} - \frac{3}{5}$	4:15	24. Plot the point (1, 1). Label it C. 	4:28
8. $3,916 + 4,207 =$	4:6	18. Write $\frac{68}{100}$ as a decimal number.	4:16		
9. Write the sum to check $283 + 39 = 322$: $322 - \text{ } = \text{ }$	4:7	19. What is the value of the 5 in: 8.15	4:17		
10. Pencils weigh 55g. Pens weigh 73g. How heavy are 1 pencil and 2 pens?	4:8	20. Round 9.6 to the nearest whole number.	4:18	25. Points A, B and C form 3 corners of a parallelogram. Plot the fourth corner of the shape and label it D.	4:28
Total (A)		Total (B)		Total (C)	
Test Total (A+B+C)		R (0-9)	Y (10-19)	G (20-25)	