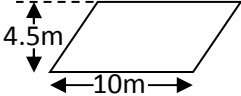
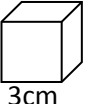
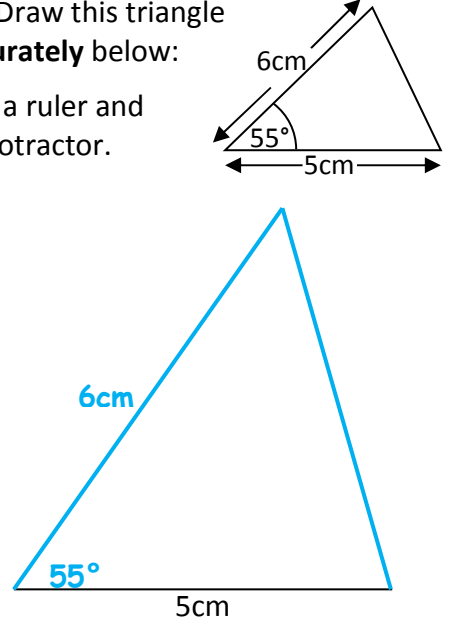


Name: _____

Date: _____

Class/Group: _____

A: Place Value, Add, Subtract, Multiply and Divide		B: Fractions, Ratio, Proportion and Algebra		C: Measure and Geometry	
1. Write nine million, seven thousand, three hundred and eight in digits.	^{6:1} 9,007,308	11. Which is the largest fraction? $\frac{2}{3}$, $\frac{5}{6}$ or $\frac{7}{12}$	^{6:7} $\frac{5}{6}$	21. How many miles are approximately equal to 4 kilometres ?	^{6:18} 2.5
2. What is the value of the 8 in this number? 1,384,721	^{6:1} 80,000	12. $\frac{5}{6} + \frac{1}{9} =$	^{6:8} $\frac{17}{18}$	22. Give the length and width of two rectangles that have an area of 20m ² .	^{6:20} 1x20, 2x10, 4x5
3. Round 7.186 to 2 decimal places.	^{6:1} 7.19	13. Simplify your answer. $\frac{2}{3} \times \frac{1}{2} =$	^{6:9} $\frac{1}{3}$	23. Find the area of this parallelogram . 	^{6:21} 45m²
4. What is the largest possible crowd? Attendance: 25,000 (to the nearest thousand)	^{6:2} 25,499	14. 0.5738 x 1000	^{6:10} 573.8	24. Calculate the volume of a cube with a 3cm side length. 	^{6:22} 27cm³
5. 1,482 x 15	^{6:3} 22,230	15. 2.15 x 3	^{6:11} 6.45	25. Draw this triangle accurately below: Use a ruler and a protractor. 	^{6:23}
6. 392 ÷ 14	^{6:3} 28	16. Write this fraction as a decimal and a percentage . $\frac{1}{5}$	^{6:12} 0.2, 20%		Shape drawn with 55° (+/- 2°) angle and 6cm (+/- 2mm) side length
7. Which is a common multiple of 4 and 6? 2 3 8 12 18	^{6:4} 12	17. Find 35% of 180.	^{6:13} 63		
8. Which factor of 25 is also a prime number ?	^{6:4} 5	18. In a class of 25 pupils, $\frac{3}{5}$ are boys. How many girls are there?	^{6:14} 10		
9. 68 - 24 ÷ 2	^{6:5} 56	19. How much will a 5 minute call cost? Call charge: 30p + 7p per minute.	^{6:15} 65p		
10. I have £10. I buy 2 coffees at £2.89 each. How much do I have left?	^{6:6} £4.22	20. What is the 10th term of this sequence? 3, 7, 11, 15, 19, ...	^{6:16} 39		
Total (A)		Total (B)		Total (C)	
Test Total (A+B+C)		R (0-9)	Y (10-19)	G (20-25)	