

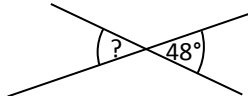
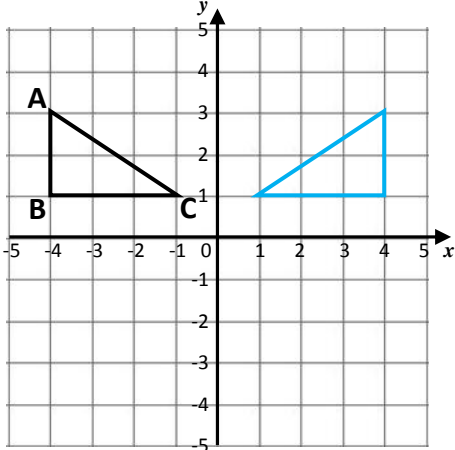

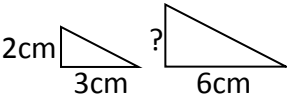


Name: _____

Date: _____

Class/Group: _____

A: Place Value, Add, Subtract, Multiply and Divide		B: Fractions, Ratio, Proportion and Algebra		C: Geometry, Position and Direction	
1. Write in words: 5,230,760	6:1 Five million, two hundred and thirty thousand, seven hundred and sixty	11. Simplify this fraction fully: $\frac{8}{24}$	6:7 $\frac{1}{3}$	21. Find the missing angle. 	6:24 28°
2. What is the value of the 1 in this number? 1,384,720	6:1 1,000,000 (million)	12. $2\frac{3}{8} + \frac{9}{12} =$	6:8 $3\frac{3}{24}$	22. On the circle draw a line to label the radius . 	6:25 Line drawn
3. Round 8,523,912 to the nearest million .	6:1 9,000,000	13. $\frac{1}{4} \div 2 =$	6:9 $\frac{1}{8}$		
4. The temperature rises from -4°C to 12°C. How many degrees has it risen?	6:2 16	14. What is the value of the 3 in this number: 25.738	6:10 $\frac{3}{100}$	23. Find the missing angle. 	6:26 48°
5. $2,246 \times 12$	6:3 26,952	15. Give your answer as a decimal: $15 \div 4$	6:11 3.75	24. What are the co-ordinates of A ? 	6:27 (-4,3)
6. What is the remainder? $2,244 \div 16$	6:3 4	16. Write this decimal as a fraction and a percentage . 	6:12 $\frac{3}{4}, 75\%$		
7. Write two common factors of 24 and 36.	6:4 1,2,3, 4,6,12	17. Find 15% of 360.	6:13 54		
8. List the first five prime numbers .	6:4 2,3,5, 7,11	18. These shapes  are similar .	6:14 4cm		
9. $15 + 4 \times 8$	6:5 47	19. There are p people on a bus. 5 get on. Write an expression for this.	6:15 p+5		
10. What is my change if I buy as many £4.49 footballs as I can with £30?	6:6 £3.06	20. Which two numbers add together to make 19 and have a difference of 3?	6:17 8, 11	25. Reflect triangle ABC in the y-axis .	6:28 Shape drawn
Total (A)		Total (B)		Total (C)	
Test Total (A+B+C)		R (0-9)	Y (10-19)		G (20-25)