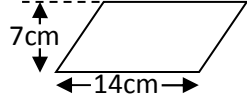
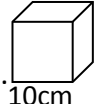
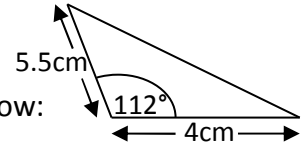

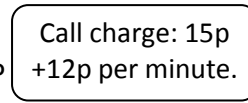
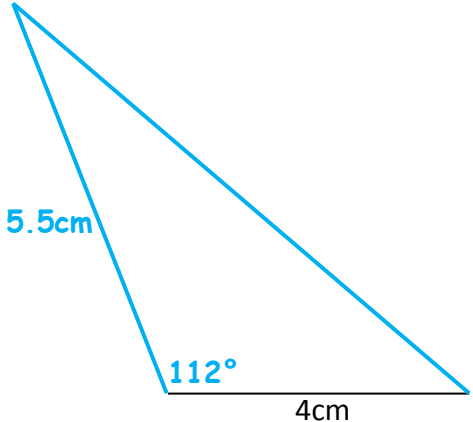


Name: _____

Date: _____

Class/Group: _____

A: Place Value, Add, Subtract, Multiply and Divide		B: Fractions, Ratio, Proportion and Algebra		C: Measure and Geometry	
1. Write two million, six hundred and twelve thousand and thirty in digits.	^{6:1} 2,612,030	11. Which is the smallest fraction? $\frac{1}{3}$, $\frac{4}{9}$ or $\frac{11}{27}$	^{6:7} $\frac{1}{3}$	21. How many miles are about equal to 12 kilometres ?	^{6:18} 7.5
2. What is the value of the 7 in this number? 5,273,914	^{6:1} 70,000	12. $\frac{7}{10} + \frac{4}{15} =$	^{6:8} $\frac{29}{30}$	22. Give the length and width of two rectangles that have an area of 12m ² .	^{6:20} 1x12, 2x6, 3x4
3. Round 8.427 to 2 decimal places.	^{6:1} 8.43	13. Simplify your answer. $\frac{6}{10} \times \frac{3}{4} =$	^{6:9} $\frac{9}{20}$	24. Find the area of this parallelogram . 	^{6:21} 98cm²
4. Write the largest possible crowd. Attendance: 5,000 (to the nearest thousand)	^{6:2} 5,499	14. 1.78 x 1000	^{6:10} 1,780	24. Calculate the volume of a cube with a 10cm side length. 	^{6:22} 1000cm³
5. 2,486 x 62	^{6:3} 154,132	15. 3.56 x 7	^{6:11} 24.92	25. Draw this triangle accurately below:  Use a ruler and a protractor.	^{6:23} Shape drawn with 112° (+/-2°) angle and 5.5cm (+/-2mm) side length
6. 1,273 ÷ 19	^{6:3} 67	16. Write this decimal as a fraction and a percentage . 	^{6:12} $\frac{4}{5}$, 80%		
7. Which is a common multiple of 22 and 33? 99 66 44 11 2	^{6:4} 66	17. Find 65% of 180.	^{6:13} 117		
8. Which factor of 25 is also a prime number ?	^{6:4} 5	18. In a class of 20 pupils, $\frac{2}{5}$ are girls. How many boys are there?	^{6:14} 12		
9. 15 + 5 x 7	^{6:5} 50	19. How much will a 9 minute call cost? 	^{6:15} £1.23		
10. I have £10. I buy 3 coffees at £1.80 each. How much do I have left?	^{6:6} £4.60	20. What is the 10th term of this sequence? 11, 14, 17, 20, 23, ...	^{6:16} 38		
Total (A)		Total (B)		Total (C)	
Test Total (A+B+C)		R (0-9)	Y (10-19)	G (20-25)	