


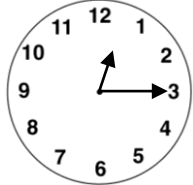




Name: \_\_\_\_\_

Date: \_\_\_\_\_

Class/Group: \_\_\_\_\_

A: Place Value, Add and Subtract		B: Multiply, Divide and Fractions		C: Measure and Geometry	
1. What is the missing number? 87 77 67 57 47 <input type="text"/>	2:1 <b>37</b>	11. $90 \div 10 =$	2:11 <b>9</b>	21. Tim has twenty pence (20p). Tick the coins that have the same value.	2:19 <b>10p + 10p</b>
2. What is the <b>value</b> of the <b>9</b> in this number? 92	2:2 <b>90</b>	12. Which are the even numbers? 2 17 16 23	2:11 <b>2, 16</b>		
3. Draw an arrow to label 8. 	2:3 <b>Arrow</b>	13. What symbol is missing? $35 = 5 \square 7$	2:12 <b>x</b>	22. Sam has fifty pence (50p). He buys an apple for thirty pence (30p). How much change does Sam get? 	2:20 <b>20p</b>
4. Use <, > or = to make this correct: $2 \times 4 \square 5 + 3$	2:4 <b>=</b>	14. What symbol is missing? $4 = 32 \square 8$	2:12 <b>÷</b>	23. What time does this clock show? 	2:22 <b>Quarter past 12</b>
5. Write this number in numerals. thirty nine	2:5 <b>39</b>	15. Tick (✓) if true: $8 \div 4 = 4 \div 8 \square$ $9 \times 7 = 7 \times 9 \square$	2:13 <b>x ✓</b>		
6. There are 29 people on a train. 16 get off. How many people now?	2:6 <b>13</b>	16. 4 boys share 20 chocolates. How many chocolates does each boy get?	2:14 <b>5</b>		
7. $20 - \square = 14$	2:7 <b>6</b>	17. 4 bags each contain 6 apples. How many apples are there in total?	2:14 <b>24</b>	24. Favourite ice-cream flavours of some pupils are shown below.	2:29
8. $67 - 10 =$	2:8 <b>57</b>	18. What fraction is shaded? 	2:15 <b><math>\frac{2}{3}</math></b>		<b>3</b>
9. Is this true? Write 'yes' or 'no'. $27 + 7 = 7 + 27$	2:9 <b>Yes</b>	19. How many <b>quarters</b> are in 1 whole?	2:15 <b>4</b>	How many pupils chose chocolate?	
10. Use $92 = 23 + 69$ to help find: $92 - 69 = \square$	2:10 <b>23</b>	20. Complete the <b>equivalent</b> fractions. $\frac{1}{2} = \frac{2}{\square}$	2:16 <b>4</b>	25. How many pupils were asked in total?	2:30 <b>6</b>
<b>Total (A)</b>		<b>Total (B)</b>		<b>Total (C)</b>	
<b>Test Total (A+B+C)</b>		<b>R (0-9)</b>	<b>Y (10-19)</b>	<b>G (20-25)</b>	