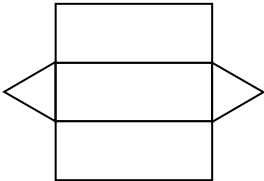
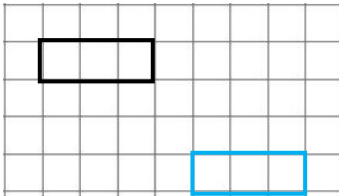



Name: _____

Date: _____

Class/Group: _____

A: Place Value, Add and Subtract		B: Multiply, Divide and Fractions		C: Measure, Geometry and Statistics																	
1. Write < or > to make this correct: 501,234 <input type="text"/> 495,837	5:1 >	11. Circle all the factors of 45. 2 4 5 12 15	5:8 5, 15	21. A 500 gram bag of sugar costs £1.80.	5:23 £5.40																
2. Write 23,905 in words.	5:1 Twenty three thousand, nine hundred and five	12. What special name do we give a number that has exactly two factors ?	5:9 Prime	Sue needs 1.5 kilograms of sugar. How much does this cost her?																	
3. Round 163,824 to the nearest ten .	5:2 163,820	13. $4,615 \div 5$	5:10 923	22. What shape is this a net of? 	5:24 Triangular Prism																
4. What is the missing number? 81,137 81,127 <input type="text"/> 81,107	5:2 81,117	14. 50.38×1000	5:11 50,380																		
5. The temperature was -4°C then increased by 13°C. What is it now?	5:3 9°C	15. Circle all of the square numbers . 4 8 25 30 38	5:12 4, 25	23. Translate the shape: 	5:28 Shape drawn																
6. What number is represented by these Roman Numerals? XCIV	5:4 94	16. $\frac{3}{4} - \frac{7}{12} =$	5:13 $\frac{2}{12}$ or $\frac{1}{6}$	4 units right and 3 units down.																	
7. $112,498 - 48,745 =$	5:5 63,753	17. Find an equivalent fraction of $\frac{2}{6}$. 	5:14 $\frac{1}{3}$	24. Complete this two-way table that shows favourite drinks of adults:	5:30																
8. $34,857 + 79,384 =$	5:5 114,241	18. Write $\frac{17}{3}$ as a mixed number .	5:15 $5\frac{2}{3}$	<table border="1" data-bbox="1480 1045 1966 1246"> <thead> <tr> <th></th> <th>Tea</th> <th>Coffee</th> <th>Total</th> </tr> </thead> <tbody> <tr> <th>Men</th> <td>39</td> <td>27</td> <td>66</td> </tr> <tr> <th>Women</th> <td>31</td> <td>49</td> <td>80</td> </tr> <tr> <th>Total</th> <td>70</td> <td>76</td> <td>146</td> </tr> </tbody> </table>		Tea	Coffee	Total	Men	39	27	66	Women	31	49	80	Total	70	76	146	Table completed
	Tea	Coffee	Total																		
Men	39	27	66																		
Women	31	49	80																		
Total	70	76	146																		
9. Complete this sum without written working. $29,750 - 4,250 =$	5:6 25,500	19. $3\frac{3}{4} \times 4 =$	5:16 15																		
10. DVDs are £9.89 each. If I buy 2, how much change do I get from £30?	5:7 £10.22	20. Round 6.72 to 1 decimal place.	5:17 6.7	25. How many more women chose coffee than chose tea?	5:30 18																
Total (A)		Total (B)		Total (C)																	
Test Total (A+B+C)		R (0-9)	Y (10-19)	G (20-25)																	